



INTELLIGENCE OLYMPIAD

General instructions

1st




Write your answer in capital Letters

ARITHMETIC

ADD ALL THE NUMBERS AND WRITE THE ANSWER IN CENTER

CLICK AND
WRITE



COMPLETE THE SUMS BY USING CODES



$$\text{Boy} + \text{Apple} + \text{Bear} + \text{Boy} = \boxed{}$$

$$\text{Bear} + \text{Bear} + \text{Boy} + \text{Bear} = \boxed{}$$

$$\text{Sun} + \text{Pig} + \text{Sun} + \text{Pig} = \boxed{}$$

$$\text{Apple} + \text{Boy} + \text{Pig} + \text{Bear} = \boxed{}$$

CLICK AND WRITE

GRAMMAR

LOOK AT THE PICTURE AND SELECTED THE CORRECT ANSWER


1



WHERE IS THE MANGO?

ON **UNDER** THE BOX?

4



WHERE IS THE MANGO?

ON **UNDER** THE BOX?


2



WHERE IS THE MANGO?

IN **BELOW** THE BOX?

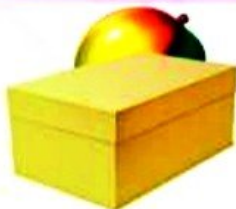
5



WHERE IS THE MANGO?

NEXT TO **IN** THE BOX?


3



WHERE IS THE MANGO?

AT **BEHIND** THE BOX?

5



WHERE IS THE MANGO?

IN FRONT OF **UNDER** THE BOX?

ANIMALS AND THEIR SURROUNDINGS


SOME WATER ANIMALS ARE GIVEN BELOW, WRITE THEIR NAME. SOME OF THEM ALSO LIVE ON LAND, TICK (✓) THEM.

CLICK AND
WRITE



PUZZLES

THERE ARE FIVE PIECES MISSING FROM THE PICTURES. LABEL THEM CORRECTLY



NO. THE PICTURES IN CORRECT ORDER

