

NUMBERS FUN

COUNT TOTAL NUMBER OF GIVEN OBJECTS WHILE ADDING THEM KEEP IN MIND THE CODE GIVEN BELOW. ONE IS DONE FOR YOU.



= 1



= 2



= 3




= 4



= 5



11




























PREPOSITION & ADJECTIVES

MATCH THE PREPOSITION WORDS WITH CORRECT POSTION OF DOGS

	<p>IN FRONT OF</p>	
	<p>IN</p>	
	<p>NEXT TO</p> <p>BETWEEN</p> <p>OVER</p> <p>BEHIND</p>	




SELECTED THE PICTURE THAT RHYMES WITH FIRST PICTURE IN EACH ROW

FRUITS AND VEGETABLES

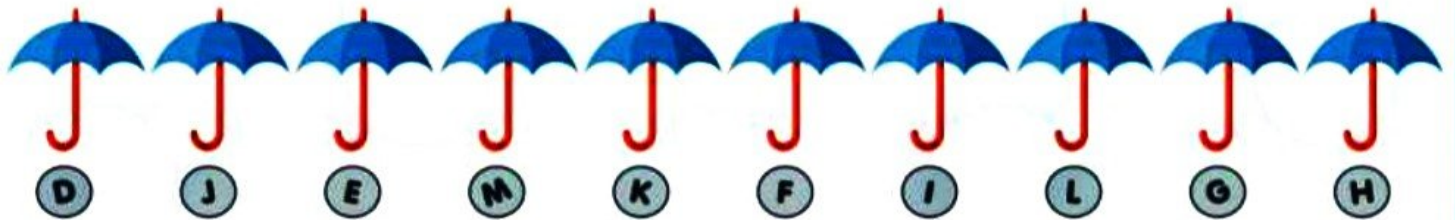
GIVEN BELOW ARE SOME FRUITS AND VEGETABLES. WRITE THEIR NAMES IN THE GIVEN BOXES. TICK THE FAST FOOD ITEMS GIVEN BELOW

CLICK AND
WRITE



BRAIN STORMING

ANSWER THE FOLLOWING QUESTIONS



1 IF UMBRELLA K AND M WILL INTERCHANGE THEIR POSITIONS, WHAT WILL BE THE NEW POSITION OF UMBRELLA K FROM THE RIGHT END

6th 8th 9th 7th

2 IF UMBRELLA K AND M WILL INTERCHANGE THEIR POSITIONS, WHAT WILL BE THE NEW POSITION OF UMBRELLA M FROM THE LEFT END


6th 5th 9th 7th


OBSERVE THE GIVEN GURE CAREFULLY AND ANSWER THE QUESTIONS BASED ON IT



1 HOW MANY SHAPES ARE ON THE LEFT OF THE SECOND SHAPE FROM THE RIGHT END?

8 7 9 10

2 IF  IS REMOVED FROM THE ROW, THEN WHICH SHAPES IS IN THE MIDDLE OF THE ROW?

3 SHAPE _____ IS ON THE FIFTH POSITION IN THE ROW FROM THE LEFT END.

4 SHAPE _____ IS ON THE SIXTH POSITION IN THE ROW FROM THE RIGHT END.