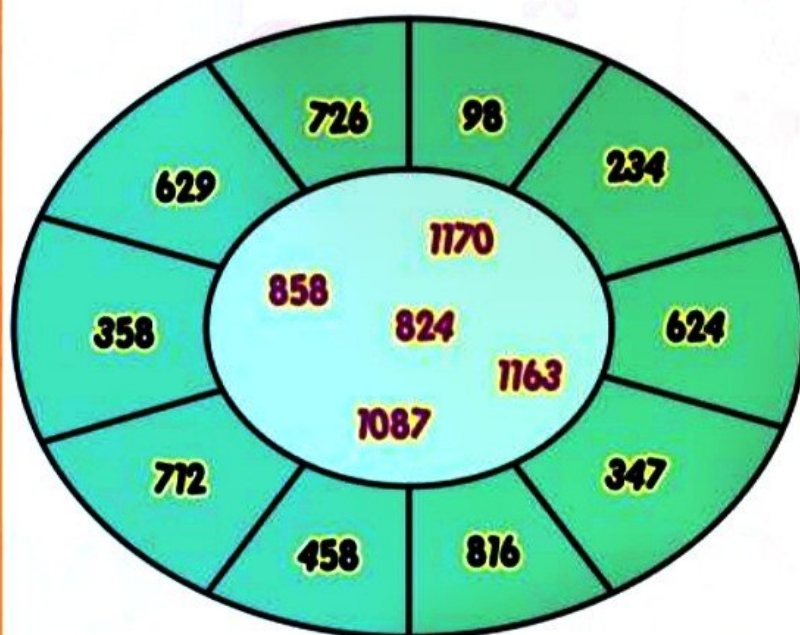


ARITHMETIC

FIND THE PAIRS OF NUMBERS IN THE OUTER CIRCLE THAT ADD UP TO MAKE THE NUMBERS IN THE INNER CIRCLE








CLICK AND WRITE

| | | | | | |
|---|----------------------|---|----------------------|---|----------------------|
| 1 | <input type="text"/> | + | <input type="text"/> | = | <input type="text"/> |
| 2 | <input type="text"/> | + | <input type="text"/> | = | <input type="text"/> |
| 3 | <input type="text"/> | + | <input type="text"/> | = | <input type="text"/> |
| 4 | <input type="text"/> | + | <input type="text"/> | = | <input type="text"/> |
| 5 | <input type="text"/> | + | <input type="text"/> | = | <input type="text"/> |

COMPLETE THE TABLE

CLICK AND WRITE

| | Food Items | No. of people who want it | No. that each will get | No. of food items left |
|---|--|---------------------------|------------------------|------------------------|
| 1 | 12  | 6 | 2 | 0 |
| 2 | 10  | 8 | | |
| 3 | 26  | 8 | | |
| 4 | 30  | 10 | | |
| 5 | 15  | 15 | | |

VERBS

SEE THE PICTURES AND WRITE ACTION WORDS






COMPLETE THE TABLE GIVING THE THREE FORMS OF THE VERBS

| | Present | Past | Past Participle |
|----|------------|------|-----------------|
| 1 | Bend | | |
| 2 | Freeze | | |
| 3 | Kneel | | |
| 4 | Deal | | |
| 5 | Grind | | |
| 6 | Learn | | |
| 7 | Shake | | |
| 8 | Forbid | | |
| 9 | Sweep | | |
| 10 | Understand | | |

OUR WORLD


**LOOK AT THE PICTURES OF SOME FAMOUS LANDMARKS OF THE WORLD.
IDENTIFY AND WRITE THEIR NAME IN THE GIVEN BOX**



CLICK AND WRITE

CLICK AND WRITE

CLICK AND WRITE



CLICK AND WRITE

CLICK AND WRITE



CLICK AND WRITE

CLICK AND WRITE

CLICK AND WRITE

ANALYSIS

**GIVEN BELOW ARE DIGITS IN THE FIRST LINE AND CODES FOR THE DIGITS IN THE SECOND LINE
CHOOSE THE CORRECT CODES FOR YOUR ANSWER FOR EACH OF THE FOLLOWING QUESTIONS**

| | | | | | | | | | | | |
|--------------|----------|----------|----------|----------|----------|----------|----------|----------|----------|----------|----------|
| Digit | : | 1 | 2 | 3 | 4 | 5 | 6 | 7 | 8 | 9 | 0 |
| Code | : | F | H | M | O | Q | Z | X | S | J | Y |

634566 Codes _____

745678 Codes _____

812567 Codes _____

631637 Codes _____

3023513 Codes _____

812368 Codes _____

799031 Codes _____

004039 Codes _____

542562 Codes _____


851473 Codes _____

CLICK AND WRITE
LOOK AT THE PICTURES AND FIND THEIR MIRROR IMAGES

01



02



03

